
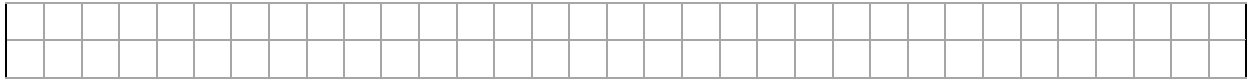


3. Simplifica las siguientes fracciones

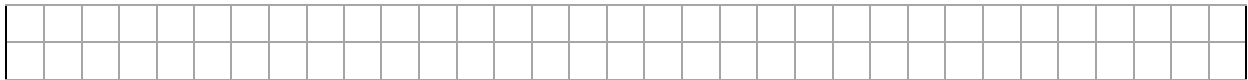
$28/36=$



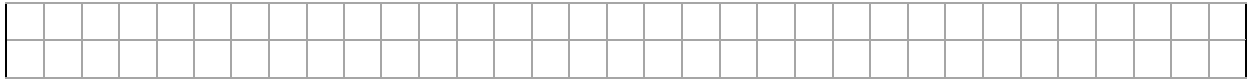
$54/108=$



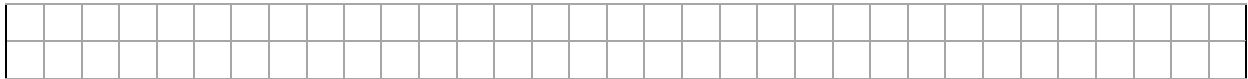
$56/96=$



$72/144=$



$84/126=$



4. Dadas las siguientes gráficas, determinar el valor numérico del fraccionario que corresponde, nombrarlo y clasificarlas como propias o impropias (P O I)

